

PDF brought to you by ResPaper.com



## **GATE 2010 : Electronics And Communication Engineering**

**Answer key / correct responses on:**

Click link: <http://www.respaper.com/gate/722/6444.pdf>

Other papers by GATE : <http://www.respaper.com/gate/>

**Upload and share your papers and class notes on ResPaper.com. It is FREE!**

**ResPaper.com has a large collection of board papers, competitive exams  
and entrance tests.**

<http://www.respaper.com/>

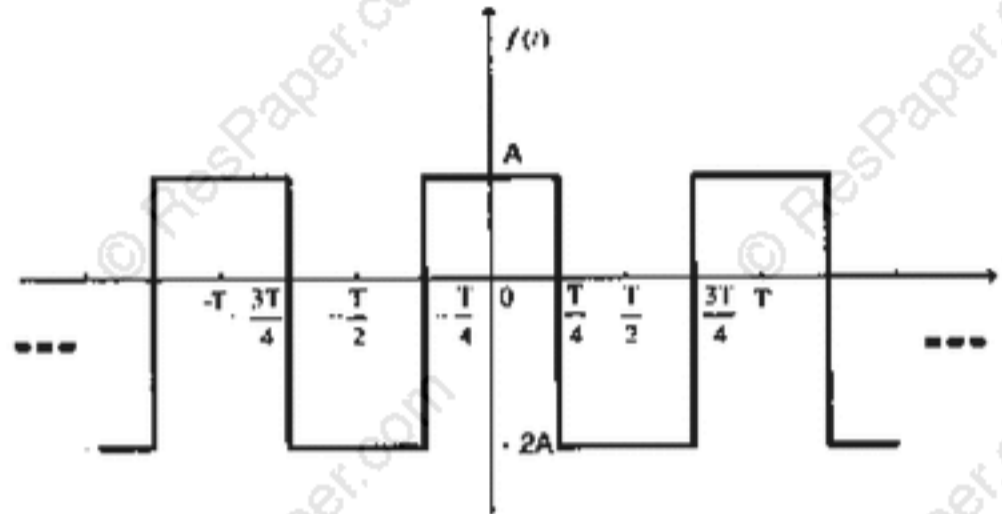
**EC : ELECTRONICS AND COMMUNICATION ENGINEERING***Duration: Three Hours**Maximum Marks: 100***Read the following instructions carefully.**

1. This question paper contains 24 pages including blank pages for rough work. Please check all pages and report discrepancy, if any.
2. Write your registration number, your name and name of the examination centre at the specified locations on the right half of the Optical Response Sheet (ORS).
3. Using HB pencil, darken the appropriate bubble under each digit of your registration number and the letters corresponding to your paper code.
4. All questions in this paper are of objective type.
5. Questions must be answered on the ORS by darkening the appropriate bubble (marked A, B, C, D) using HB pencil against the question number on the left hand side of the ORS. For each question **darken the bubble of the correct answer**. In case you wish to change an answer, erase the old answer completely. More than one answer bubbled against a question will be treated as an incorrect response.
6. There are a total of 65 questions carrying 100 marks.
7. Questions Q.1 – Q.25 will carry 1-mark each, and questions Q.26 – Q.55 will carry 2-marks each.
8. Questions Q.48 – Q.51 (2 pairs) are common data questions and question pairs (Q.52, Q.53) and (Q.54, Q.55) are linked answer questions. The answer to the second question of the linked answer questions depends on the answer to the first question of the pair. If the first question in the linked pair is wrongly answered or is un-attempted, then the answer to the second question in the pair will not be evaluated.
9. Questions Q.56 – Q.65 belong to general aptitude (GA). Questions Q.56 – Q.60 will carry 1-mark each, and questions Q.61 – Q.65 will carry 2-marks each. The GA questions will begin on a fresh page starting from page 15.
10. Un-attempted questions will carry zero marks.
11. Wrong answers will carry **NEGATIVE** marks. For Q.1 – Q.25 and Q.56 – Q.60,  $\frac{1}{3}$  mark will be deducted for each wrong answer. For Q.26 – Q.51 and Q.61 – Q.65,  $\frac{2}{3}$  mark will be deducted for each wrong answer. The question pairs (Q.52, Q.53), and (Q.54, Q.55) are questions with linked answers. There will be negative marks only for wrong answer to the first question of the linked answer question pair i.e. for Q.52 and Q.54.  $\frac{2}{3}$  mark will be deducted for each wrong answer. There is no negative marking for Q.53 and Q.55.
12. Calculator (without data connectivity) is allowed in the examination hall.
13. Charts, graph sheets or tables are NOT allowed in the examination hall.
14. Rough work can be done on the question paper itself. Additionally, blank pages are provided at the end of the question paper for rough work.

**Q.1 – Q.25 carry one mark each.**

- Q.1 The eigenvalues of a skew-symmetric matrix are  
 (A) always zero (B) always pure imaginary  
 (C) either zero or pure imaginary (D) always real

- Q.2 The trigonometric Fourier series for the waveform  $f(t)$  shown below contains

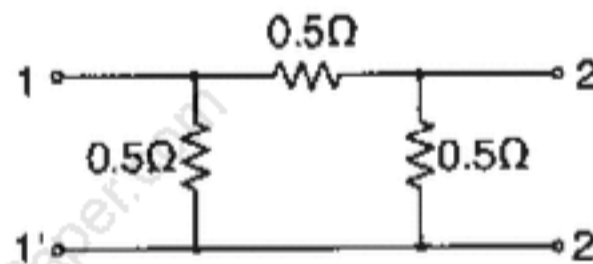


- (A) only cosine terms and zero value for the dc component  
 (B) only cosine terms and a positive value for the dc component  
 (C) only cosine terms and a negative value for the dc component  
 (D) only sine terms and a negative value for the dc component

- Q.3 A function  $n(x)$  satisfies the differential equation  $\frac{d^2 n(x)}{dx^2} - \frac{n(x)}{L^2} = 0$  where  $L$  is a constant. The boundary conditions are:  $n(0) = K$  and  $n(\infty) = 0$ . The solution to this equation is

- (A)  $n(x) = K \exp(x/L)$  (B)  $n(x) = K \exp(-x/\sqrt{L})$   
 (C)  $n(x) = K^2 \exp(-x/L)$  (D)  $n(x) = K \exp(-x/L)$

- Q.4 For the two-port network shown below, the short-circuit admittance parameter matrix is



- (A)  $\begin{bmatrix} 4 & -2 \\ -2 & 4 \end{bmatrix} \text{ S}$  (B)  $\begin{bmatrix} 1 & -0.5 \\ -0.5 & 1 \end{bmatrix} \text{ S}$   
 (C)  $\begin{bmatrix} 1 & 0.5 \\ 0.5 & 1 \end{bmatrix} \text{ S}$  (D)  $\begin{bmatrix} 4 & 2 \\ 2 & 4 \end{bmatrix} \text{ S}$

- Q.5 For a parallel RLC circuit, which one of the following statements is NOT correct?

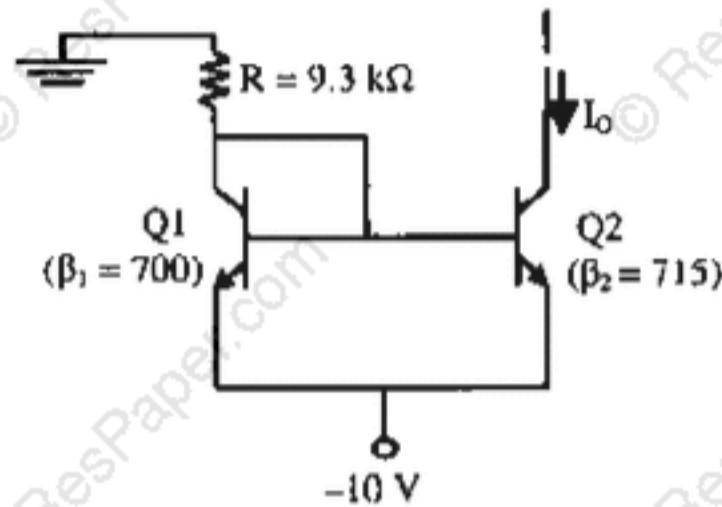
- (A) The bandwidth of the circuit decreases if  $R$  is increased  
 (B) The bandwidth of the circuit remains same if  $L$  is increased  
 (C) At resonance, input impedance is a real quantity  
 (D) At resonance, the magnitude of input impedance attains its minimum value



2010

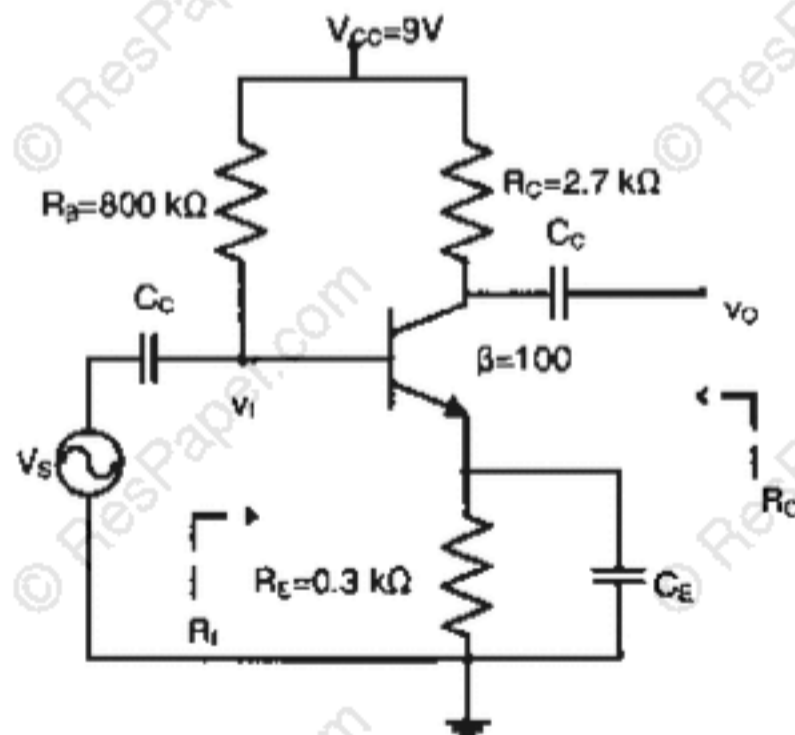
EC

- Q.6 At room temperature, a possible value for the mobility of electrons in the inversion layer of a silicon n-channel MOSFET is  
 (A)  $450 \text{ cm}^2/\text{V}\cdot\text{s}$  (B)  $1350 \text{ cm}^2/\text{V}\cdot\text{s}$  (C)  $1800 \text{ cm}^2/\text{V}\cdot\text{s}$  (D)  $3600 \text{ cm}^2/\text{V}\cdot\text{s}$
- Q.7 Thin gate oxide in a CMOS process is preferably grown using  
 (A) wet oxidation (B) dry oxidation  
 (C) epitaxial deposition (D) ion implantation
- Q.8 In the silicon BJT circuit shown below, assume that the emitter area of transistor Q1 is half that of transistor Q2.



The value of current  $I_o$  is approximately

- (A) 0.5 mA (B) 2 mA (C) 9.3 mA (D) 15 mA
- Q.9 The amplifier circuit shown below uses a silicon transistor. The capacitors  $C_c$  and  $C_E$  can be assumed to be short at signal frequency and the effect of output resistance  $r_o$  can be ignored. If  $C_E$  is disconnected from the circuit, which one of the following statements is TRUE?

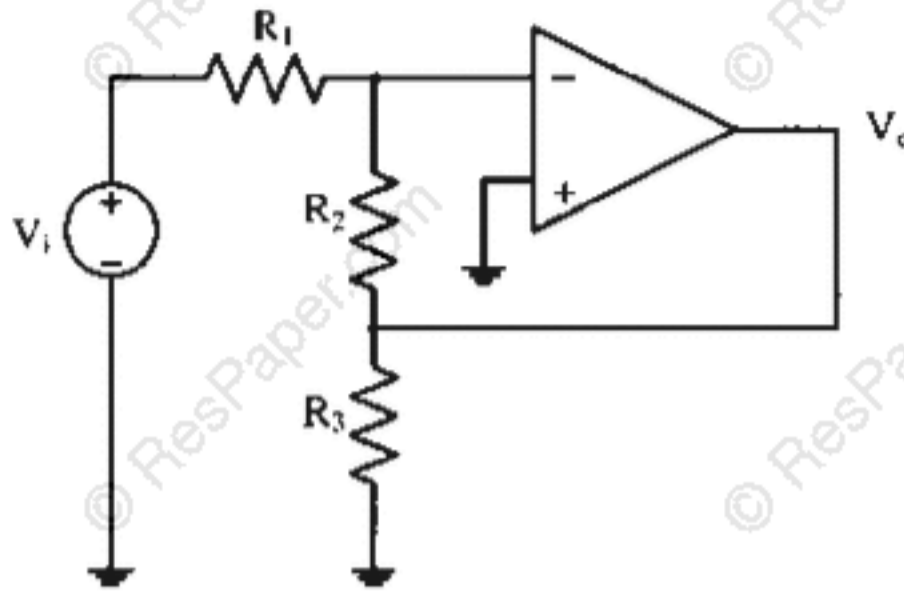


- (A) The input resistance  $R_i$  increases and the magnitude of voltage gain  $A_v$  decreases  
 (B) The input resistance  $R_i$  decreases and the magnitude of voltage gain  $A_v$  increases  
 (C) Both input resistance  $R_i$  and the magnitude of voltage gain  $A_v$  decrease  
 (D) Both input resistance  $R_i$  and the magnitude of voltage gain  $A_v$  increase

EC

V24

Q.10 Assuming the OP-AMP to be ideal, the voltage gain of the amplifier shown below is



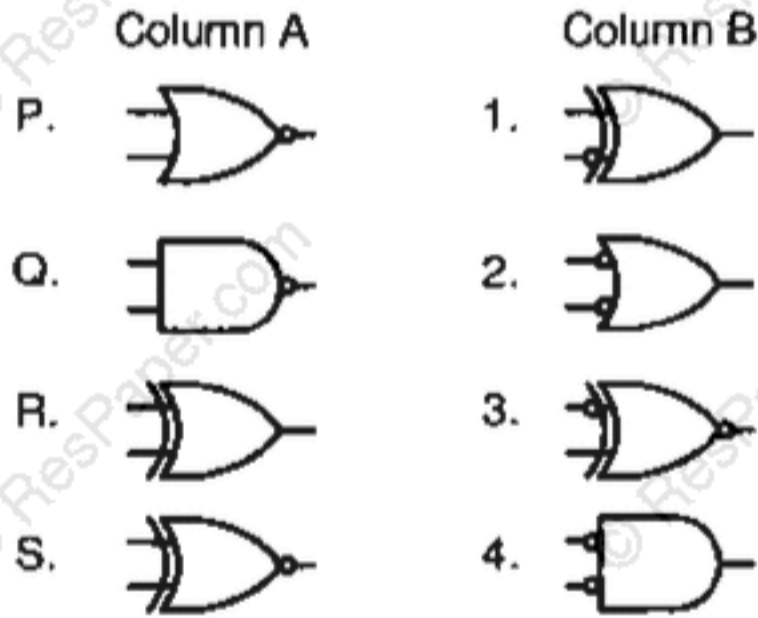
(A)  $-\frac{R_2}{R_1}$

(B)  $-\frac{R_2}{R_1}$

(C)  $-\left(\frac{R_2 \parallel R_3}{R_1}\right)$

(D)  $-\left(\frac{R_2 + R_3}{R_1}\right)$

Q.11 Match the logic gates in Column A with their equivalents in Column B.



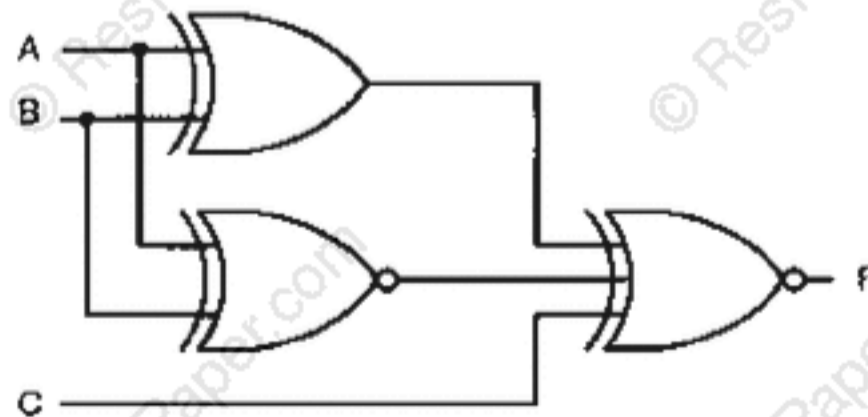
(A) P-2, Q-4, R-1, S-3

(B) P-4, Q-2, R-1, S-3

(C) P-2, Q-4, R-3, S-1

(D) P-4, Q-2, R-3, S-1

Q.12 For the output F to be 1 in the logic circuit shown, the input combination should be



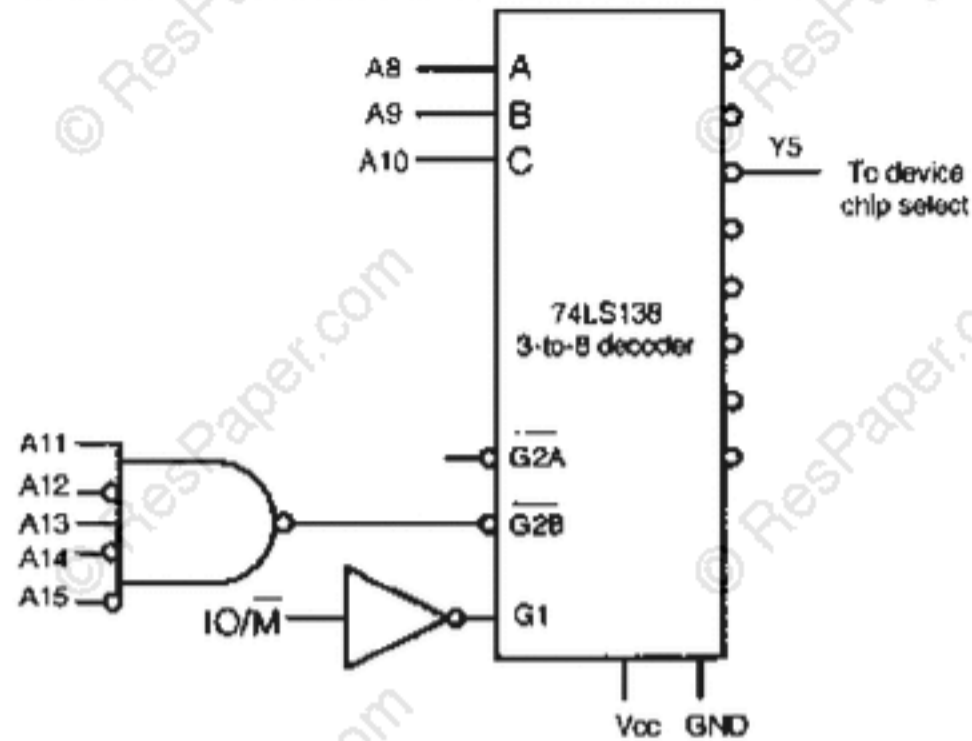
(A) A = 1, B = 1, C = 0

(B) A = 1, B = 0, C = 0

(C) A = 0, B = 1, C = 0

(D) A = 0, B = 0, C = 1

Q.13 In the circuit shown, the device connected to Y5 can have address in the range



- (A) 2000 – 20FF      (B) 2D00 – 2DFF      (C) 2E00 – 2EFF      (D) FD00 – FDFF

Q.14 Consider the  $z$ -transform  $X(z) = 5z^2 + 4z^{-1} + 3$ ;  $0 < |z| < \infty$ . The inverse  $z$ -transform  $x[n]$  is

- (A)  $5\delta[n+2] + 3\delta[n] + 4\delta[n-1]$       (B)  $5\delta[n-2] + 3\delta[n] + 4\delta[n+1]$   
 (C)  $5u[n+2] + 3u[n] + 4u[n-1]$       (D)  $5u[n-2] + 3u[n] + 4u[n+1]$

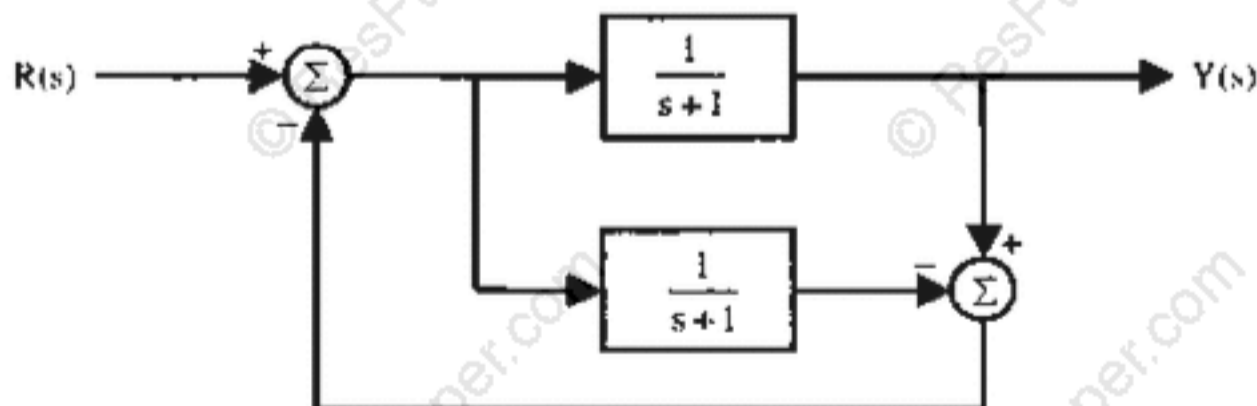
Q.15 Two discrete time systems with impulse responses  $h_1[n] = \delta[n-1]$  and  $h_2[n] = \delta[n-2]$  are connected in cascade. The overall impulse response of the cascaded system is

- (A)  $\delta[n-1] + \delta[n-2]$       (B)  $\delta[n-4]$       (C)  $\delta[n-3]$       (D)  $\delta[n-1]\delta[n-2]$

Q.16 For an  $N$ -point FFT algorithm with  $N = 2^m$ , which one of the following statements is TRUE?

- (A) It is not possible to construct a signal flow graph with both input and output in normal order  
 (B) The number of butterflies in the  $m^{\text{th}}$  stage is  $N/m$   
 (C) In-place computation requires storage of only  $2N$  node data  
 (D) Computation of a butterfly requires only one complex multiplication

Q.17 The transfer function  $Y(s)/R(s)$  of the system shown is



- (A) 0      (B)  $\frac{1}{s+1}$       (C)  $\frac{2}{s+1}$       (D)  $\frac{2}{s+3}$



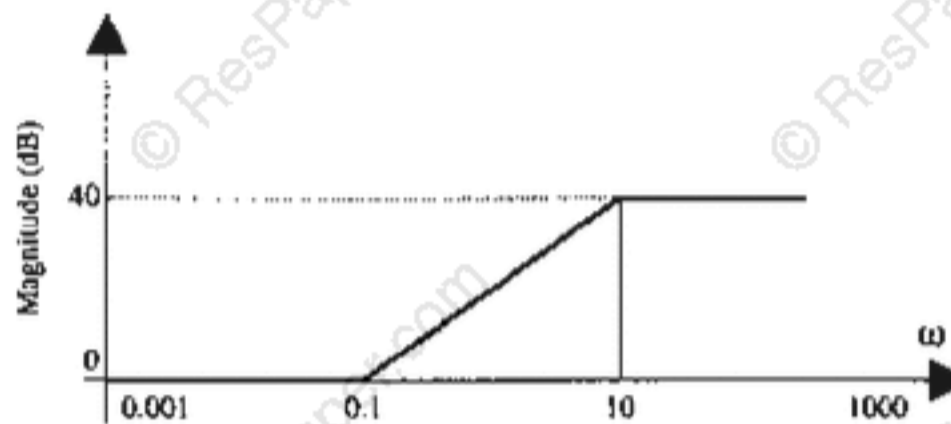
2010

EC:

Q.18 A system with the transfer function  $\frac{Y(s)}{X(s)} = \frac{s}{s+p}$  has an output  $y(t) = \cos\left(2t - \frac{\pi}{3}\right)$  for the input signal  $x(t) = p \cos\left(2t - \frac{\pi}{2}\right)$ . Then, the system parameter 'p' is

- (A)  $\sqrt{3}$  (B)  $\frac{2}{\sqrt{3}}$  (C) 1 (D)  $\frac{\sqrt{3}}{2}$

Q.19 For the asymptotic Bode magnitude plot shown below, the system transfer function can be



- (A)  $\frac{10s+1}{0.1s+1}$  (B)  $\frac{100s+1}{0.1s+1}$  (C)  $\frac{100s}{10s+1}$  (D)  $\frac{0.1s+1}{10s+1}$

Q.20 Suppose that the modulating signal is  $m(t) = 2 \cos(2\pi f_m t)$  and the carrier signal is  $x_c(t) = A_c \cos(2\pi f_c t)$ . Which one of the following is a conventional AM signal without over-modulation?

- (A)  $x(t) = A_c m(t) \cos(2\pi f_c t)$   
 (B)  $x(t) = A_c [1 + m(t)] \cos(2\pi f_c t)$   
 (C)  $x(t) = A_c \cos(2\pi f_c t) + \frac{A_c}{4} m(t) \cos(2\pi f_c t)$   
 (D)  $x(t) = A_c \cos(2\pi f_m t) \cos(2\pi f_c t) + A_c \sin(2\pi f_m t) \sin(2\pi f_c t)$

Q.21 Consider an angle modulated signal  $x(t) = 6 \cos[2\pi \times 10^5 t + 2 \sin(8000\pi t) + 4 \cos(8000\pi t)]$  V. The average power of  $x(t)$  is

- (A) 10 W (B) 18 W (C) 20 W (D) 28 W

Q.22 If the scattering matrix  $[S]$  of a two port network is

$$[S] = \begin{bmatrix} 0.2 \angle 0^\circ & 0.9 \angle 90^\circ \\ 0.9 \angle 90^\circ & 0.1 \angle 90^\circ \end{bmatrix}$$

then the network is

- (A) lossless and reciprocal (B) lossless but not reciprocal  
 (C) not lossless but reciprocal (D) neither lossless nor reciprocal

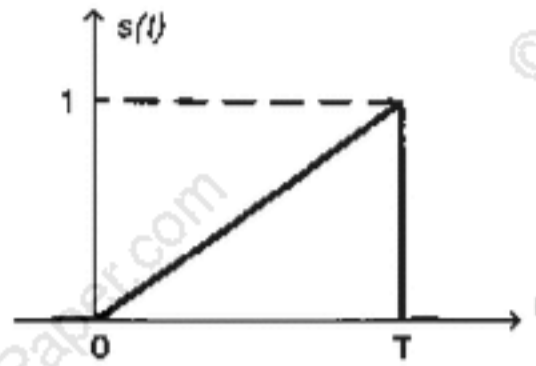
Q.23 A transmission line has a characteristic impedance of  $50 \Omega$  and a resistance of  $0.1 \Omega/\text{m}$ . If the line is distortionless, the attenuation constant (in Np/m) is

- (A) 500 (B) 5 (C) 0.014 (D) 0.002

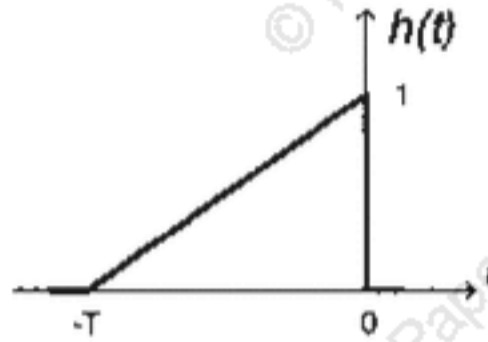
EC

624

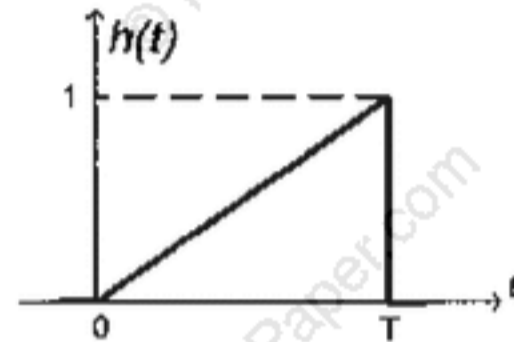
- Q.24 Consider the pulse shape  $s(t)$  as shown. The impulse response  $h(t)$  of the filter matched to this pulse is



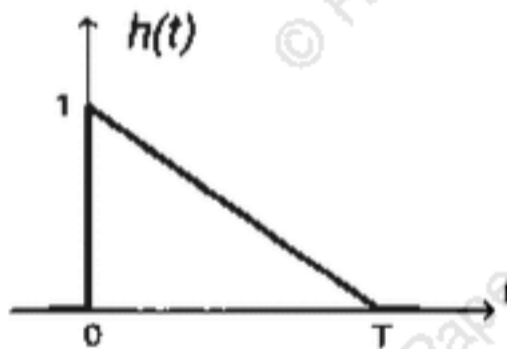
(A)



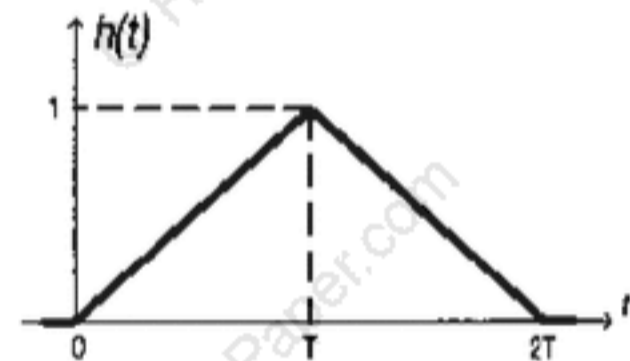
(B)



(C)



(D)



- Q.25 The electric field component of a time harmonic plane EM wave traveling in a nonmagnetic lossless dielectric medium has an amplitude of 1 V/m. If the relative permittivity of the medium is 4, the magnitude of the time-average power density vector (in  $\text{W/m}^2$ ) is

(A)  $\frac{1}{30\pi}$

(B)  $\frac{1}{60\pi}$

(C)  $\frac{1}{120\pi}$

(D)  $\frac{1}{240\pi}$

Q.26 – Q.55 carry two marks each.

- Q.26 If  $e^y = x^{\frac{1}{x}}$ , then  $y$  has a

(A) maximum at  $x = e$ (B) minimum at  $x = e$ (C) maximum at  $x = e^{-1}$ (D) minimum at  $x = e^{-1}$ 

- Q.27 A fair coin is tossed independently four times. The probability of the event "the number of times heads show up is more than the number of times tails show up" is

(A)  $\frac{1}{16}$

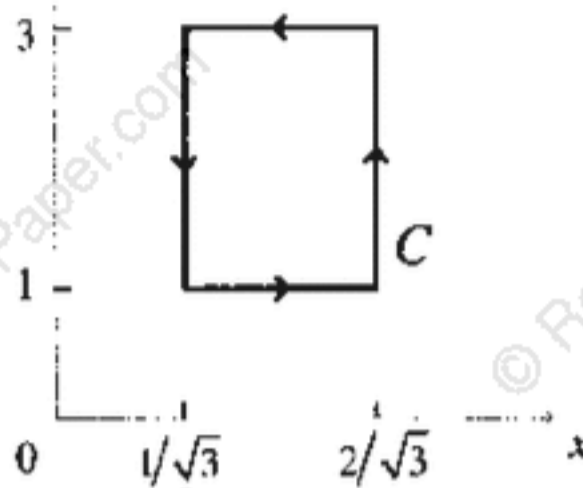
(B)  $\frac{1}{8}$

(C)  $\frac{1}{4}$

(D)  $\frac{5}{16}$



Q.28 If  $\vec{A} = xy \hat{a}_x + x^2 \hat{a}_y$ , then  $\oint_C \vec{A} \cdot d\vec{l}$  over the path shown in the figure is



- (A) 0                      (B)  $\frac{2}{\sqrt{3}}$                       (C) 1                      (D)  $2\sqrt{3}$

Q.29 The residues of a complex function  $X(z) = \frac{1-2z}{z(z-1)(z-2)}$  at its poles are

- (A)  $\frac{1}{2}$ ,  $-\frac{1}{2}$  and 1                      (B)  $\frac{1}{2}$ ,  $\frac{1}{2}$  and -1  
(C)  $\frac{1}{2}$ , 1 and  $-\frac{3}{2}$                       (D)  $\frac{1}{2}$ , -1 and  $\frac{3}{2}$

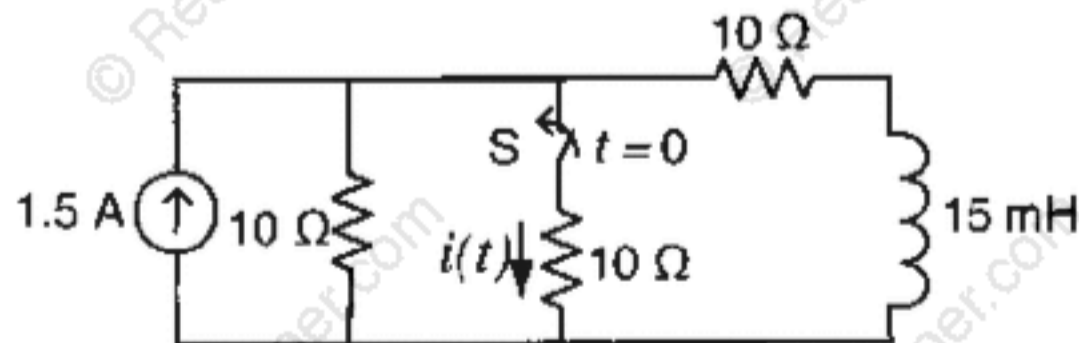
Q.30 Consider a differential equation  $\frac{dy(x)}{dx} - y(x) = x$  with the initial condition  $y(0) = 0$ . Using Euler's first order method with a step size of 0.1, the value of  $y(0.3)$  is

- (A) 0.01                      (B) 0.031                      (C) 0.0631                      (D) 0.1

Q.31 Given  $f(t) = \mathcal{L}^{-1} \left[ \frac{3s+1}{s^3+4s^2+(K-3)s} \right]$ . If  $\lim_{t \rightarrow \infty} f(t) = 1$ , then the value of  $K$  is

- (A) 1                      (B) 2                      (C) 3                      (D) 4

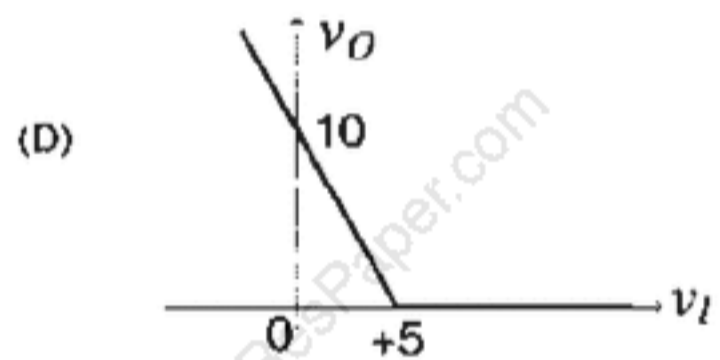
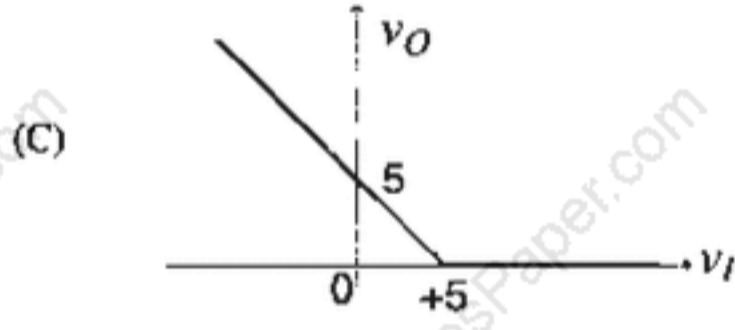
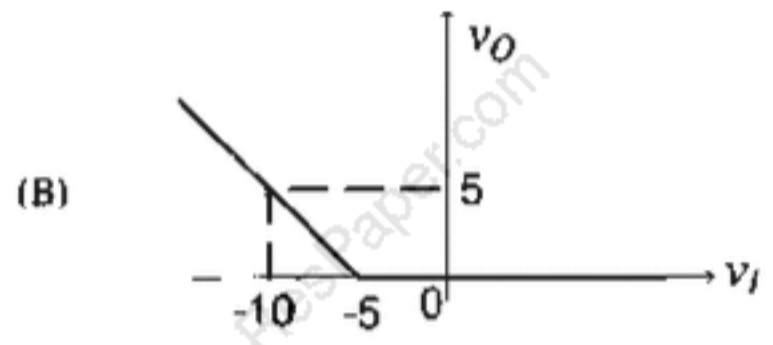
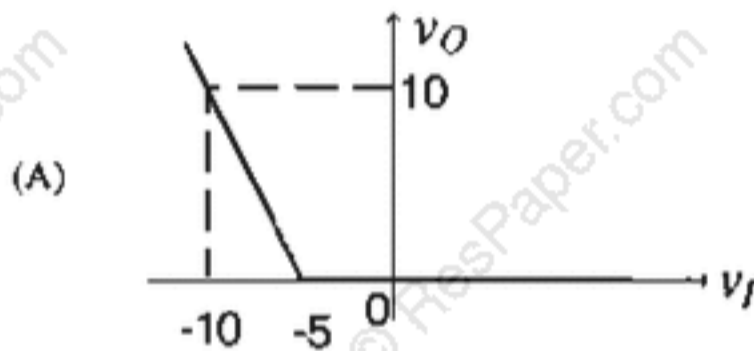
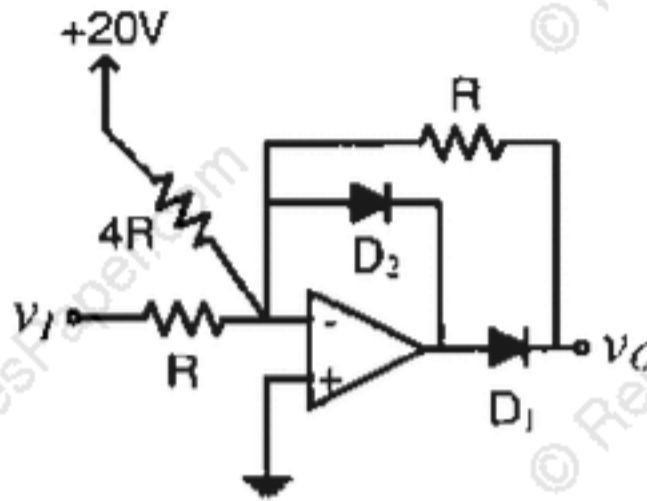
Q.32 In the circuit shown, the switch  $S$  is open for a long time and is closed at  $t = 0$ . The current  $i(t)$  for  $t \geq 0^+$  is



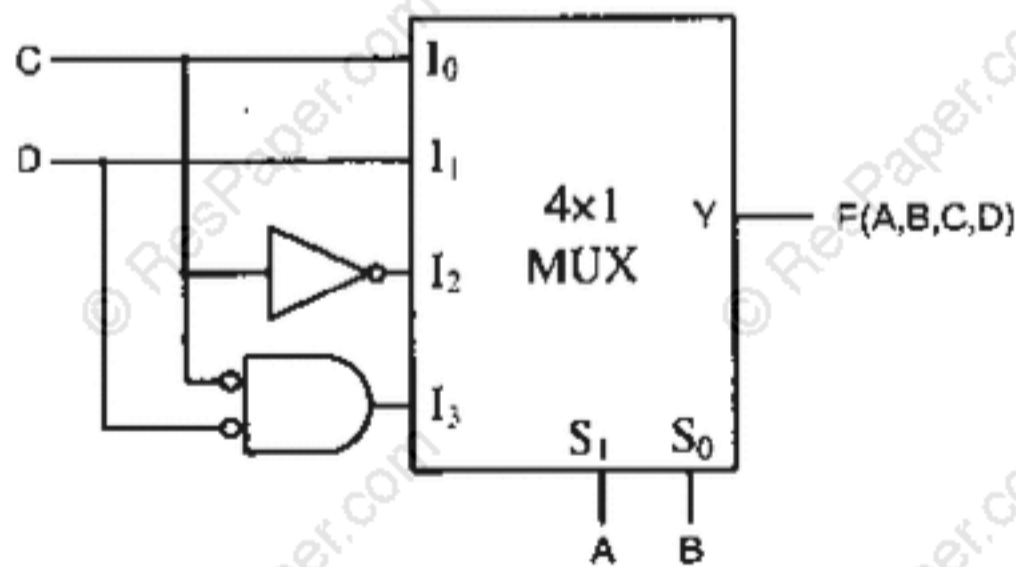
- (A)  $i(t) = 0.5 - 0.125e^{-1000t}$  A                      (B)  $i(t) = 1.5 - 0.125e^{-1000t}$  A  
(C)  $i(t) = 0.5 - 0.5e^{-1000t}$  A                      (D)  $i(t) = 0.375e^{-1000t}$  A



Q.38 The transfer characteristic for the precision rectifier circuit shown below is (assume ideal OP-AMP and practical diodes)



Q.39 The Boolean function realized by the logic circuit shown is



- (A)  $F = \sum m(0, 1, 3, 5, 9, 10, 14)$
- (C)  $F = \sum m(1, 2, 4, 5, 11, 14, 15)$

- (B)  $F = \sum m(2, 3, 5, 7, 8, 12, 13)$
- (D)  $F = \sum m(2, 3, 5, 7, 8, 9, 12)$



- Q.40 For the 8085 assembly language program given below, the content of the accumulator after the execution of the program is

3000	MVI A, 45H
3002	MOV B, A
3003	STC
3004	CMC
3005	RAR
3006	XRA B

- (A) 00H                      (B) 45H                      (C) 67H                      (D) E7H
- Q.41 A continuous time LTI system is described by
- $$\frac{d^2 y(t)}{dt^2} + 4 \frac{dy(t)}{dt} + 3y(t) = 2 \frac{dx(t)}{dt} + 4x(t)$$
- Assuming zero initial conditions, the response  $y(t)$  of the above system for the input  $x(t) = e^{-2t}u(t)$  is given by
- (A)  $(e^t - e^{3t})u(t)$       (B)  $(e^{-t} - e^{-3t})u(t)$       (C)  $(e^{-t} + e^{-3t})u(t)$       (D)  $(e^t + e^{3t})u(t)$
- Q.42 The transfer function of a discrete time LTI system is given by

$$H(z) = \frac{2 - \frac{3}{4}z^{-1}}{1 - \frac{3}{4}z^{-1} + \frac{1}{8}z^{-2}}$$

Consider the following statements:

S1: The system is stable and causal for ROC:  $|z| > \frac{1}{2}$

S2: The system is stable but not causal for ROC:  $|z| < \frac{1}{4}$

S3: The system is neither stable nor causal for ROC:  $\frac{1}{4} < |z| < \frac{1}{2}$

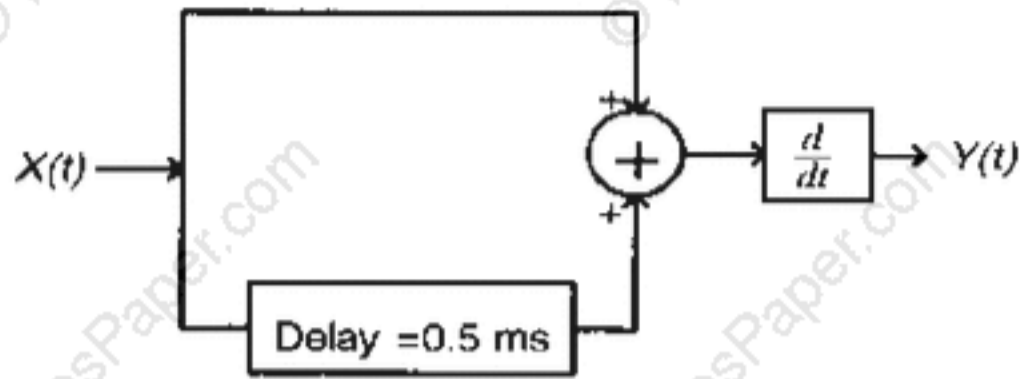
Which one of the following statements is valid?

- (A) Both S1 and S2 are true                      (B) Both S2 and S3 are true  
 (C) Both S1 and S3 are true                      (D) S1, S2 and S3 are all true
- Q.43 The Nyquist sampling rate for the signal  $s(t) = \frac{\sin(500\pi t)}{\pi t} \times \frac{\sin(700\pi t)}{\pi t}$  is given by
- (A) 400 Hz                      (B) 600 Hz                      (C) 1200 Hz                      (D) 1400 Hz

- Q.44 A unity negative feedback closed loop system has a plant with the transfer function  $G(s) = \frac{1}{s^2 + 2s + 2}$  and a controller  $G_c(s)$  in the feedforward path. For a unit step input, the transfer function of the controller that gives minimum steady state error is

- (A)  $G_c(s) = \frac{s+1}{s+2}$                       (B)  $G_c(s) = \frac{s+2}{s+1}$   
 (C)  $G_c(s) = \frac{(s+1)(s+4)}{(s+2)(s+3)}$                       (D)  $G_c(s) = 1 + \frac{2}{s} + 3s$

- Q.45  $X(t)$  is a stationary process with the power spectral density  $S_X(f) > 0$  for all  $f$ . The process is passed through a system shown below.

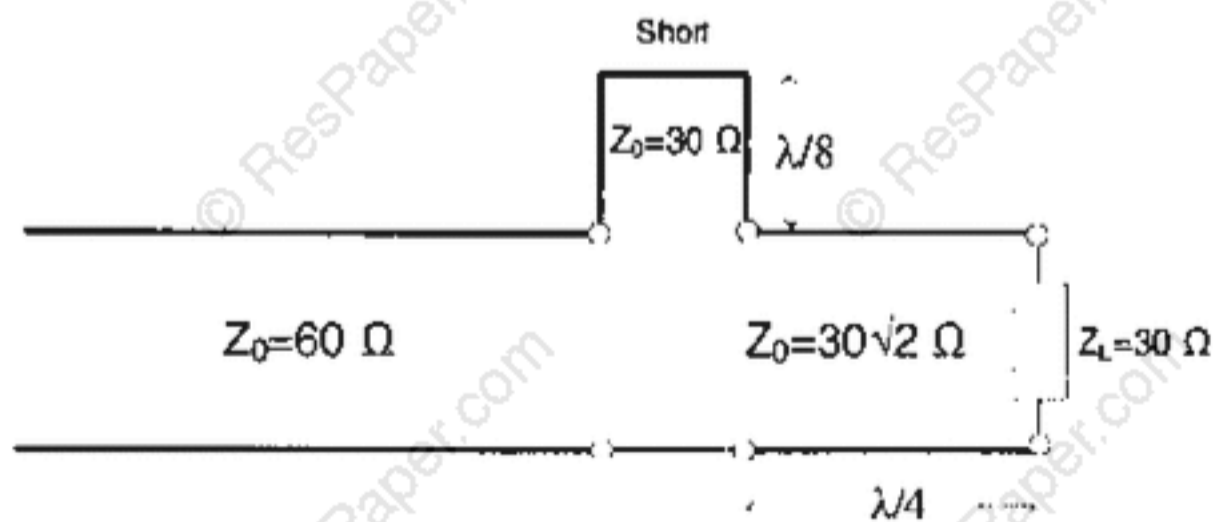


Let  $S_Y(f)$  be the power spectral density of  $Y(t)$ . Which one of the following statements is correct?

- (A)  $S_Y(f) > 0$  for all  $f$   
 (B)  $S_Y(f) = 0$  for  $|f| > 1$  kHz  
 (C)  $S_Y(f) = 0$  for  $f = nf_0$ ,  $f_0 = 2$  kHz,  $n$  any integer  
 (D)  $S_Y(f) = 0$  for  $f = (2n+1)f_0$ ,  $f_0 = 1$  kHz,  $n$  any integer
- Q.46 A plane wave having the electric field component  $\vec{E}_i = 24 \cos(3 \times 10^8 t - \beta y) \hat{a}_z$  V/m and traveling in free space is incident normally on a lossless medium with  $\mu = \mu_0$  and  $\epsilon = 9\epsilon_0$  which occupies the region  $y \geq 0$ . The reflected magnetic field component is given by

- (A)  $\frac{1}{10\pi} \cos(3 \times 10^8 t + y) \hat{a}_x$ , A/m  
 (B)  $\frac{1}{20\pi} \cos(3 \times 10^8 t + y) \hat{a}_x$ , A/m  
 (C)  $-\frac{1}{20\pi} \cos(3 \times 10^8 t + y) \hat{a}_x$ , A/m  
 (D)  $-\frac{1}{10\pi} \cos(3 \times 10^8 t + y) \hat{a}_x$ , A/m

- Q.47 In the circuit shown, all the transmission line sections are lossless. The Voltage Standing Wave Ratio (VSWR) on the  $60\Omega$  line is



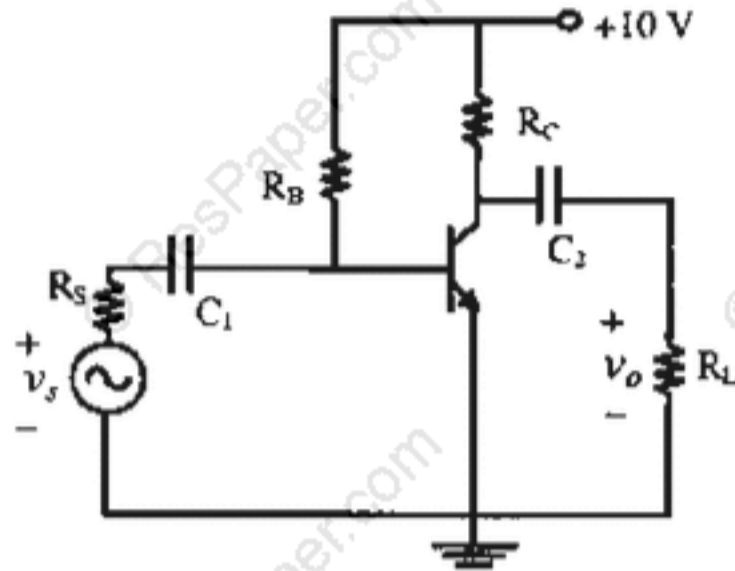
- (A) 1.00  
 (B) 1.64  
 (C) 2.50  
 (D) 3.00

## Common Data Questions

### Common Data for Questions 48 and 49:

Consider the common emitter amplifier shown below with the following circuit parameters:

$\beta = 100$ ,  $g_m = 0.3861$  A/V,  $r_o = \infty$ ,  $r_x = 259 \Omega$ ,  $R_S = 1$  k $\Omega$ ,  $R_B = 93$  k $\Omega$ ,  $R_C = 250 \Omega$ ,  $R_L = 1$  k $\Omega$ ,  $C_1 = \infty$  and  $C_2 = 4.7 \mu$ F.



Q.48 The resistance seen by the source  $v_s$  is

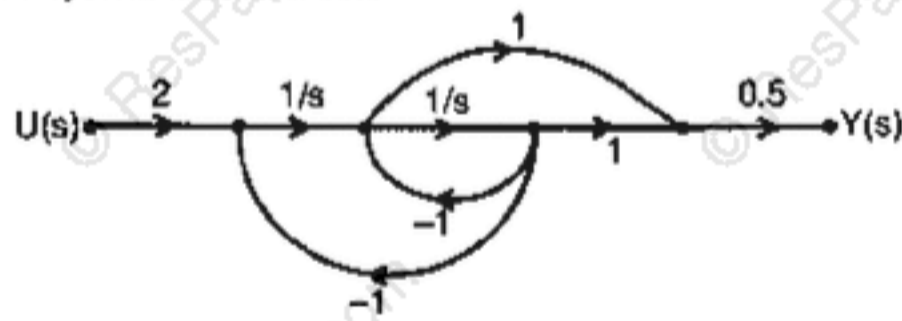
- (A) 258  $\Omega$                       (B) 1258  $\Omega$                       (C) 93 k $\Omega$                       (D)  $\infty$

Q.49 The lower cut-off frequency due to  $C_2$  is

- (A) 33.9 Hz                      (B) 27.1 Hz                      (C) 13.6 Hz                      (D) 16.9 Hz

### Common Data for Questions 50 and 51:

The signal flow graph of a system is shown below.



Q.50 The state variable representation of the system can be

(A)  $\dot{\mathbf{x}} = \begin{bmatrix} 1 & 1 \\ -1 & 0 \end{bmatrix} \mathbf{x} + \begin{bmatrix} 0 \\ 2 \end{bmatrix} u$                       (B)  $\dot{\mathbf{x}} = \begin{bmatrix} -1 & 1 \\ -1 & 0 \end{bmatrix} \mathbf{x} + \begin{bmatrix} 0 \\ 2 \end{bmatrix} u$   
 $y = [0 \quad 0.5] \mathbf{x}$                        $y = [0 \quad 0.5] \mathbf{x}$

(C)  $\dot{\mathbf{x}} = \begin{bmatrix} 1 & 1 \\ -1 & 0 \end{bmatrix} \mathbf{x} + \begin{bmatrix} 0 \\ 2 \end{bmatrix} u$                       (D)  $\dot{\mathbf{x}} = \begin{bmatrix} -1 & 1 \\ -1 & 0 \end{bmatrix} \mathbf{x} + \begin{bmatrix} 0 \\ 2 \end{bmatrix} u$   
 $y = [0.5 \quad 0.5] \mathbf{x}$                        $y = [0.5 \quad 0.5] \mathbf{x}$

Q.51 The transfer function of the system is

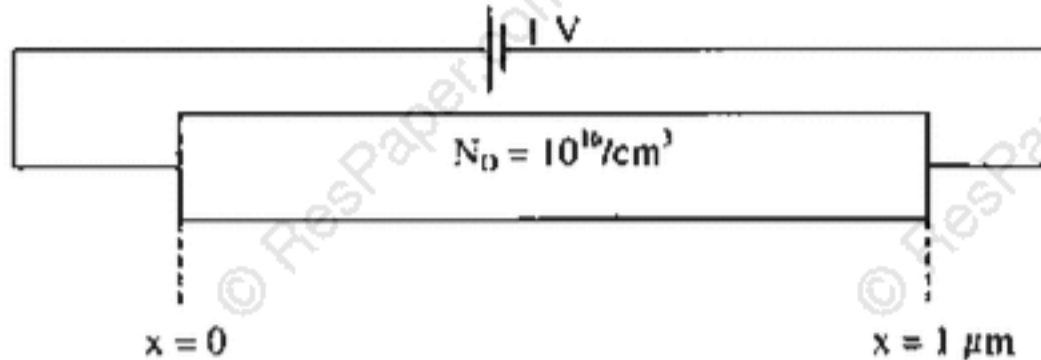
(A)  $\frac{s+1}{s^2+1}$                       (B)  $\frac{s-1}{s^2+1}$                       (C)  $\frac{s+1}{s^2+s+1}$                       (D)  $\frac{s-1}{s^2+s+1}$



### Linked Answer Questions

#### Statement for Linked Answer Questions 52 and 53:

The silicon sample with unit cross-sectional area shown below is in thermal equilibrium. The following information is given:  $T = 300$  K, electronic charge =  $1.6 \times 10^{-19}$  C, thermal voltage = 26 mV and electron mobility =  $1350$   $\text{cm}^2/\text{V}\cdot\text{s}$ .



Q.52 The magnitude of the electric field at  $x = 0.5 \mu\text{m}$  is

- (A) 1 kV/cm      (B) 5 kV/cm      (C) 10 kV/cm      (D) 26 kV/cm

Q.53 The magnitude of the electron drift current density at  $x = 0.5 \mu\text{m}$  is

- (A)  $2.16 \times 10^4$  A/cm<sup>2</sup>    (B)  $1.08 \times 10^4$  A/cm<sup>2</sup>    (C)  $4.32 \times 10^3$  A/cm<sup>2</sup>    (D)  $6.48 \times 10^2$  A/cm<sup>2</sup>

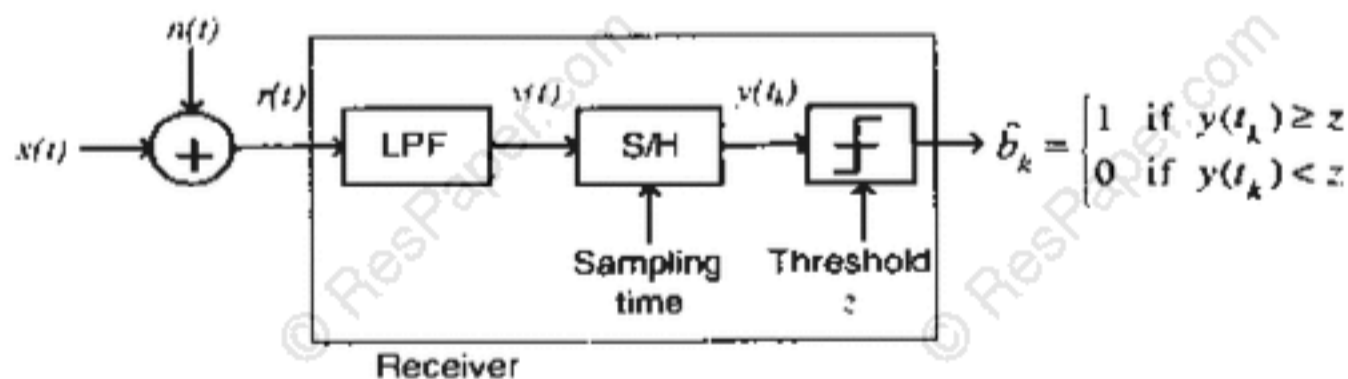
#### Statement for Linked Answer Questions 54 and 55:

Consider a baseband binary PAM receiver shown below. The additive channel noise  $n(t)$  is white with power spectral density  $S_N(f) = N_0/2 = 10^{-20}$  W/Hz. The low-pass filter is ideal with unity gain and cutoff frequency 1 MHz. Let  $Y_k$  represent the random variable  $y(t_k)$ .

$$Y_k = N_k \quad \text{if transmitted bit } b_k = 0$$

$$Y_k = a + N_k \quad \text{if transmitted bit } b_k = 1$$

where  $N_k$  represents the noise sample value. The noise sample has a probability density function,  $p_{N_k}(n) = 0.5\alpha e^{-\alpha|n|}$  (This has mean zero and variance  $2/\alpha^2$ ). Assume transmitted bits to be equiprobable and threshold  $z$  is set to  $a/2 = 10^{-6}$  V.



Q.54 The value of the parameter  $\alpha$  (in  $\text{V}^{-1}$ ) is

- (A)  $10^{10}$       (B)  $10^7$       (C)  $1.414 \times 10^{-10}$       (D)  $2 \times 10^{20}$

Q.55 The probability of bit error is

- (A)  $0.5 \times e^{-3.5}$       (B)  $0.5 \times e^{-5}$       (C)  $0.5 \times e^{-7}$       (D)  $0.5 \times e^{-10}$

**General Aptitude (GA) Questions****Q.56 – Q.60 carry one mark each.**

Q.56 Which of the following options is the closest in meaning to the word below:  
**Circuitous**

- (A) cyclic
- (B) indirect
- (C) confusing
- (D) crooked

Q.57 The question below consists of a pair of related words followed by four pairs of words. Select the pair that best expresses the relation in the original pair.

**Unemployed : Worker**

- (A) fallow : land
- (B) unaware : sleeper
- (C) wit : jester
- (D) renovated : house

Q.58 Choose the most appropriate word from the options given below to complete the following sentence:

If we manage to \_\_\_\_\_ our natural resources, we would leave a better planet for our children.

- (A) uphold
- (B) restrain
- (C) cherish
- (D) conserve

Q.59 Choose the most appropriate word from the options given below to complete the following sentence:

His rather casual remarks on politics \_\_\_\_\_ his lack of seriousness about the subject.

- (A) masked
- (B) belied
- (C) betrayed
- (D) suppressed

Q.60 25 persons are in a room. 15 of them play hockey, 17 of them play football and 10 of them play both hockey and football. Then the number of persons playing neither hockey nor football is:

- (A) 2
- (B) 17
- (C) 13
- (D) 3

**Q.61 – Q.65 carry two marks each.**

Q.61 Modern warfare has changed from large scale clashes of armies to suppression of civilian populations. Chemical agents that do their work silently appear to be suited to such warfare; and regrettably, there exist people in military establishments who think that chemical agents are useful tools for their cause.

Which of the following statements best sums up the meaning of the above passage:

- (A) Modern warfare has resulted in civil strife.
- (B) Chemical agents are useful in modern warfare.
- (C) Use of chemical agents in warfare would be undesirable.
- (D) People in military establishments like to use chemical agents in war.

Q.62 If  $137 + 276 = 435$  how much is  $731 + 672$ ?

- (A) 534 (B) 1403 (C) 1623 (D) 1513

Q.63 5 skilled workers can build a wall in 20 days; 8 semi-skilled workers can build a wall in 25 days; 10 unskilled workers can build a wall in 30 days. If a team has 2 skilled, 6 semi-skilled and 5 unskilled workers, how long will it take to build the wall?

- (A) 20 days (B) 18 days (C) 16 days (D) 15 days

Q.64 Given digits 2, 2, 3, 3, 3, 4, 4, 4, 4 how many distinct 4 digit numbers greater than 3000 can be formed?

- (A) 50 (B) 51 (C) 52 (D) 54

Q.65 Hari (H), Gita (G), Irfan (I) and Saira (S) are siblings (i.e. brothers and sisters). All were born on 1<sup>st</sup> January. The age difference between any two successive siblings (that is born one after another) is less than 3 years. Given the following facts:

- i. Hari's age + Gita's age > Irfan's age + Saira's age.
- ii. The age difference between Gita and Saira is 1 year. However, Gita is not the oldest and Saira is not the youngest.
- iii. There are no twins.

In what order were they born (oldest first)?

- (A) HSI G (B) SGHI (C) IGSH (D) IHSG

**END OF THE QUESTION PAPER**